

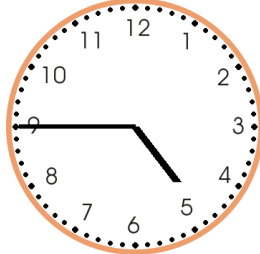








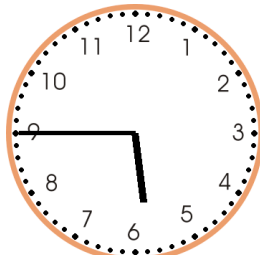


## Telling time Worksheet

Write the time.

<p><b>1 a.</b></p>  <p style="text-align: center;">_ : _</p>	<p><b>1 b.</b></p>  <p style="text-align: center;">_ : _</p>	<p><b>1 c.</b></p>  <p style="text-align: center;">_ : _</p>
<p><b>2 a.</b></p>  <p style="text-align: center;">_ : _</p>	<p><b>2 b.</b></p>  <p style="text-align: center;">_ : _</p>	<p><b>2 c.</b></p>  <p style="text-align: center;">_ : _</p>
<p><b>3 a.</b></p>  <p style="text-align: center;">_ : _</p>	<p><b>3 b.</b></p>  <p style="text-align: center;">_ : _</p>	<p><b>3 c.</b></p>  <p style="text-align: center;">_ : _</p>
<p><b>4 a.</b></p>  <p style="text-align: center;">_ : _</p>	<p><b>4 b.</b></p>  <p style="text-align: center;">_ : _</p>	<p><b>4 c.</b></p>  <p style="text-align: center;">_ : _</p>

Name: \_\_\_\_\_ Date: \_\_\_\_\_

## Answer Key

<b>1 a.</b> 9:15	<b>1 b.</b> 1:45	<b>1 c.</b> 4:45
<b>2 a.</b> 10:15	<b>2 b.</b> 1:00	<b>2 c.</b> 7:45
<b>3 a.</b> 3:45	<b>3 b.</b> 11:00	<b>3 c.</b> 8:30
<b>4 a.</b> 0:30	<b>4 b.</b> 2:15	<b>4 c.</b> 5:45